



















































































					fertig?	
1		S. 58		 Rechengeschichten		
2		S. 59		 Rechengeschichten		
3		S. 59		 Rechengeschichte erfinden und dem Partner erzählen		
4	TH	S. 36				
5	KV	72				
6		S. 60		 Minusaufgaben im Zwanzigerfeld		
7	TH	S. 37				
8	KV	73-74				
9		S. 61		 Minusaufgaben im Zwanzigerfeld		
10		S. 61		  Minusaufgaben im Zwanzigerfeld		
11		S. 62		  Minusaufgaben im Zwanzigerfeld		
12		S. 62		 Minusaufgaben		
13		S. 62		 Minusaufgaben würfeln		
14	TH	S. 38				
15	KV	75-76				
16		S. 63		  Entdeckerpäckchen		
17		S. 63		 Aufgaben mit dem Ergebnis 5 in der 1-1-Tafel anmalen		
18		S. 63		 Sachaufgabe		
19		S. 64		  Entdeckerpäckchen		
20		S. 64		 Aufgaben mit 5 in der 1-1-Tafel anmalen		
21		S. 64		 $> = <$		
22	TH	S. 39				

23	KV	77				
24		S. 65		 Aufgaben mit Ergebnis 10		
25		S. 65		  Minusaufgaben		
26		S. 65		 Aufgaben mit Ergebnis 10 in der 1–1-Tafel anmalen		
27		S. 66		  Entdeckerpäckchen		
28		S. 66		 Verliebte Zahlen in der 1–1-Tafel anmalen		
29	TH	S. 40				
30	KV	78 Nr. 1, 2				
31		S. 67		 Aufgaben mit 10		
32		S. 67		 Aufgaben mit 10		
33		S. 67		 Aufgaben mit 10 in der 1–1-Tafel anmalen		
34		S. 67		 Minusaufgaben mit 5 und 10		
35	TH	S. 41				
36	KV	78 Nr. 3				
37		S. 68		 Rechenmaschine		
38		S. 68		 Sachaufgabe		
39		S. 69		 Minusaufgaben mit dem Ergebnis < 10		
40		S. 69		  Zwerg- und Riesenaufgaben		
41		S. 70		 Zwerg- und Riesenaufgaben		
42		S. 70		 Zwerg- und Riesenaufgaben		
43	TH	S. 42				
44		S. 71		 Zwerg- und Riesenaufgaben		
45		S. 71		 Riesenaufgaben		
46		S. 71		  Entdeckerpäckchen		

47	TH	S. 43				
48	KV	78-80				
49		S. 72		 Zwerg- und Riesenaufgaben		
50		S. 72		 Minusaufgaben		
51		S. 73		 $> = <$		
52		S. 73		  Aufgaben mit Rechentricks verbinden		
53	TH	S. 44				
54	TH	S. 45				
55		S. 74		 Ergänzungsaufgaben		
56		S. 74		 Ergänzungsaufgaben		
57		S. 74		 Ergänzungsaufgaben		
58		S. 74		 Minusaufgaben bilden und rechnen		
59	TH	S. 46				
60	KV	81-84				
61		S. 2 - 43		 Alle Aufgaben		

 : Mathebuch (dick)

 : Rechenheft (Kästchen)

TH: Trainingsheft (dünn)

 : Indianerheft

KV: Kopiervorlage

Sollten Sie Fragen haben:

Frau Lins:

alins@hgs.monheim.de

Frau Schalong

sschalong@hgs.monheim.de


Bitte NICHT vorarbeiten!!!!!!

www.anton.app


hier gibt es tolle Matheaufgaben.




1




$$\square - \square = \square$$



$$\square - \square = \square$$



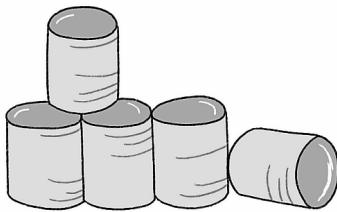
$$\square - \square = \square$$




$$\square - \square = \square$$




2




$$\square - \square = \square$$



$$\square - \square = \square$$



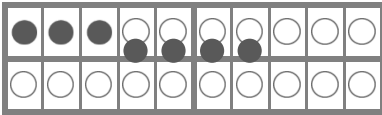
$$\square - \square = \square$$



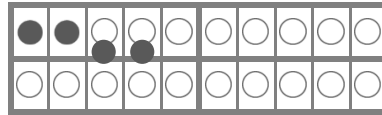
$$\square - \square = \square$$



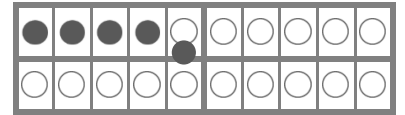
1



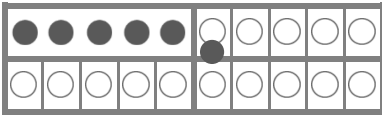
$$\boxed{7} - \boxed{4} = \boxed{}$$



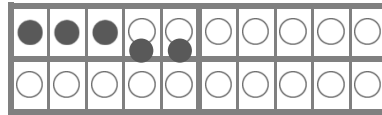
$$\boxed{} - \boxed{} = \boxed{}$$



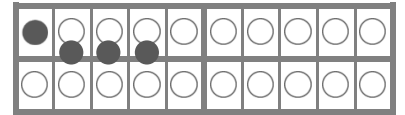
$$\boxed{} - \boxed{} = \boxed{}$$



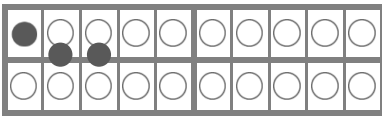
$$\boxed{} - \boxed{} = \boxed{}$$



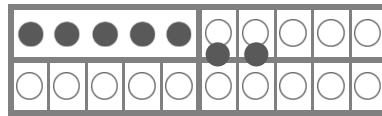
$$\boxed{} - \boxed{} = \boxed{}$$



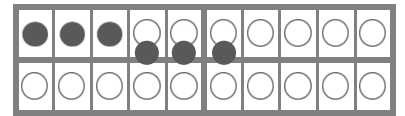
$$\boxed{} - \boxed{} = \boxed{}$$



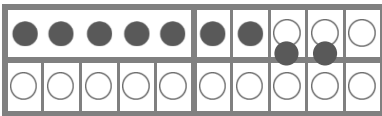
$$\boxed{} - \boxed{} = \boxed{}$$



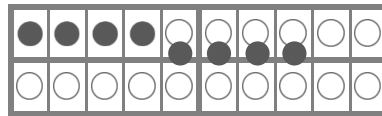
$$\boxed{} - \boxed{} = \boxed{}$$




$$\boxed{} - \boxed{} = \boxed{}$$



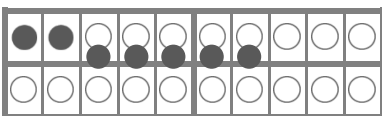
$$\boxed{} - \boxed{} = \boxed{}$$



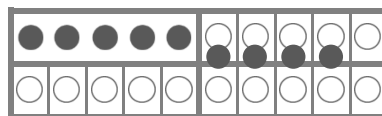
$$\boxed{} - \boxed{} = \boxed{}$$



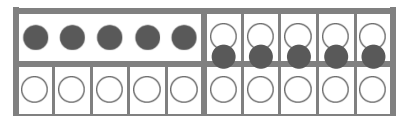
$$\boxed{} - \boxed{} = \boxed{}$$



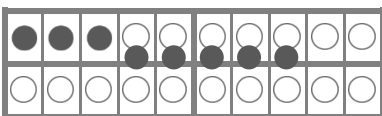
$$\boxed{} - \boxed{} = \boxed{}$$



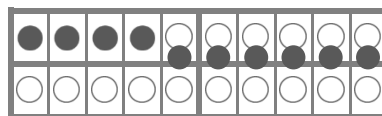
$$\boxed{} - \boxed{} = \boxed{}$$



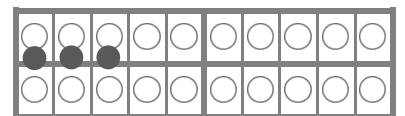
$$\boxed{} - \boxed{} = \boxed{}$$



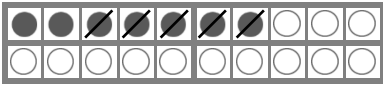
$$\boxed{} - \boxed{} = \boxed{}$$



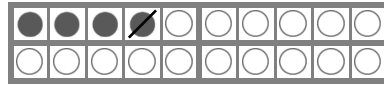
$$\boxed{} - \boxed{} = \boxed{}$$



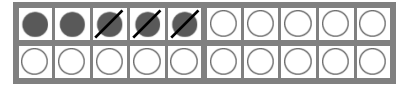
$$\boxed{} - \boxed{} = \boxed{}$$

**1**

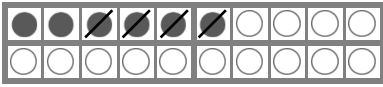
$$\boxed{7} - \boxed{5} = \boxed{}$$



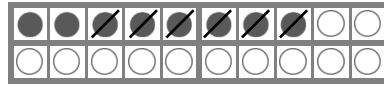
$$\boxed{} - \boxed{} = \boxed{}$$




$$\boxed{} - \boxed{} = \boxed{}$$



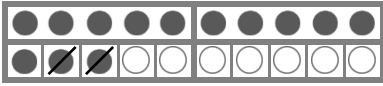
$$\boxed{} - \boxed{} = \boxed{}$$




$$\boxed{} - \boxed{} = \boxed{}$$




$$\boxed{} - \boxed{} = \boxed{}$$



$$\boxed{} - \boxed{} = \boxed{}$$



$$\boxed{} - \boxed{} = \boxed{}$$




$$\boxed{} - \boxed{} = \boxed{}$$

**2**

Lege, male, rechne.



$$6 - 3 = \boxed{}$$



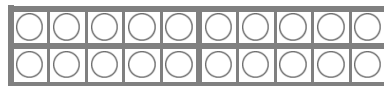
$$4 - 2 = \boxed{}$$



$$8 - 6 = \boxed{}$$



$$7 - 4 = \boxed{}$$



$$5 - 2 = \boxed{}$$



$$10 - 9 = \boxed{}$$



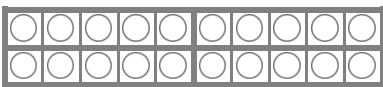
$$16 - 5 = \boxed{}$$



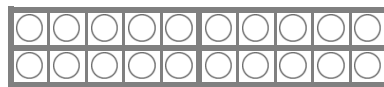
$$12 - 2 = \boxed{}$$



$$19 - 7 = \boxed{}$$



$$20 - 5 = \boxed{}$$




$$17 - 6 = \boxed{}$$




$$15 - 4 = \boxed{}$$




1 Lege, male, rechne.



$$\square - \square = \square$$



$$\square - \square = \square$$



$$\square - \square = \square$$



$$\square - \square = \square$$



$$\square - \square = \square$$



$$\square - \square = \square$$



$$\square - \square = \square$$




$$\square - \square = \square$$



$$\square - \square = \square$$



$$\square - \square = \square$$



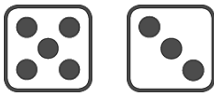
$$\square - \square = \square$$




$$\square - \square = \square$$




2



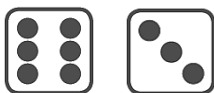
$$\square - \square = \square$$



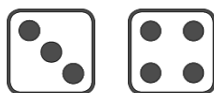
$$\square - \square = \square$$



$$\square - \square = \square$$




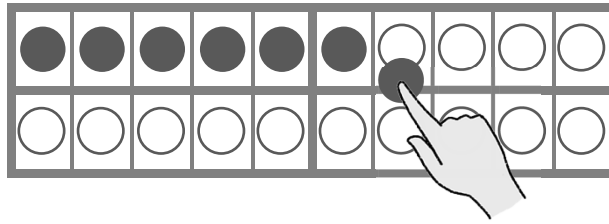
$$\square - \square = \square$$



$$\square - \square = \square$$



$$\square - \square = \square$$


1 Lege und rechne.


$10 - 4 = \square$

$9 - 5 = \square$

$7 - 4 = \square$

$10 - 1 = \square$

$9 - 2 = \square$

$6 - 3 = \square$

$10 - 0 = \square$

$9 - 6 = \square$

$5 - 2 = \square$

$10 - 7 = \square$

$9 - 3 = \square$

$4 - 1 = \square$

$5 - 4 = \square$

$10 - 9 = \square$

$19 - 3 = \square$

$6 - 2 = \square$

$9 - 8 = \square$

$18 - 3 = \square$

$4 - 0 = \square$

$8 - 7 = \square$

$17 - 3 = \square$

$9 - 7 = \square$

$7 - 6 = \square$

$16 - 3 = \square$

$15 - 5 = \square$

$14 - 3 = \square$

$20 - 3 = \square$

$13 - 2 = \square$

$18 - 5 = \square$

$19 - 9 = \square$

$18 - 8 = \square$

$16 - 2 = \square$

$18 - 4 = \square$

$16 - 5 = \square$

$15 - 0 = \square$

$17 - 7 = \square$




5



1



$$8 - 5 = \square$$



$$6 - 5 = \square$$



$$9 - 5 = \square$$



$$7 - 5 = \square$$



$$10 - 5 = \square$$



$$5 - 5 = \square$$



2

$$5 - 3 = \square$$

$$5 - 2 = \square$$

$$5 - 0 = \square$$

$$5 - 4 = \square$$

$$5 - 1 = \square$$

$$5 - 5 = \square$$



3

$$8 - 5 = \square$$

$$10 - 5 = \square$$

$$6 - 5 = \square$$

$$5 - 5 = \square$$

$$7 - 5 = \square$$

$$9 - 5 = \square$$



4




Anton hat 7 .

2  fliegen weg.



10

 **1** $13 - 3 = \square$
 $14 - \square = \square$
 $16 - \square = \square$

$12 - \square = \square$
 $17 - \square = \square$
 $19 - \square = \square$


$11 - \square = \square$
 $15 - \square = \square$
 $18 - \square = \square$



$10 - 8 = \square$
 $10 - 5 = \square$
 $10 - 1 = \square$


$10 - 3 = \square$
 $10 - 2 = \square$
 $10 - 7 = \square$

$10 - 6 = \square$
 $10 - 4 = \square$
 $10 - 9 = \square$

 **3** $13 - 10 = \square$
 $14 - 10 = \square$
 $19 - 10 = \square$

$16 - 10 = \square$
 $12 - 10 = \square$
 $17 - 10 = \square$

$11 - 10 = \square$
 $15 - 10 = \square$
 $18 - 10 = \square$

 **4** $8 - 5 = \square$
 $5 - 4 = \square$
 $10 - 8 = \square$
 $9 - 5 = \square$

$5 - 2 = \square$
 $7 - 5 = \square$
 $14 - 4 = \square$
 $10 - 3 = \square$

$13 - 3 = \square$
 $17 - 7 = \square$
 $12 - 10 = \square$
 $18 - 10 = \square$

**1**

$\square - \square = \square$



$15 - 3 = \square \square$



$\square - \square = \square$



$18 - 6 = \square \square$



$\square - \square = \square$



$17 - 7 = \square \square$



$\square - \square = \square$



$14 - 2 = \square \square$



$\square - \square = \square$



$17 - 4 = \square \square$



$\square - \square = \square$



$13 - 2 = \square \square$

**2**

$\square - \square = \square$



$12 - 1 = \square \square$



$\square - \square = \square$



$17 - 3 = \square \square$



$\square - \square = \square$



$18 - 7 = \square \square$



$\square - \square = \square$



$16 - 4 = \square \square$



$\square - \square = \square$



$19 - 2 = \square \square$



$\square - \square = \square$



$20 - 6 = \square \square$



1 Male Zwerg- und Riesenaufgabe in der gleichen Farbe an.

$$16 - 4 = \square$$

$$10 - 6 = \square$$

$$4 - 3 = \square$$

$$19 - 7 = \square$$

$$9 - 7 = \square$$

$$6 - 4 = \square$$

$$20 - 6 = \square$$

$$14 - 3 = \square$$



2 Denke an die Zwergaufgabe.

Überprüfe. Ein Ergebnis bleibt übrig.



$$18 - 4 = \square$$

$$19 - 4 = \square$$

$$20 - 5 = \square$$

$$17 - 2 = \square$$

$$16 - 4 = \square$$

$$14 - 3 = \square$$

$$15 - 3 = \square$$

$$15 - 2 = \square$$

$$18 - 7 = \square$$

$$13 - 2 = \square$$

$$18 - 6 = \square$$

$$19 - 6 = \square$$

$$14 - 1 = \square$$

$$16 - 5 = \square$$

$$19 - 3 = \square$$

11, 12, 13, 14, 15, 16

11, 12, 12, 13, 14, 15

11, 11, 13, 15, 15, 16



3 Denke an die Zwergaufgabe.



$$13 - 2 = \square$$

$$16 - 3 = \square$$

$$14 - 2 = \square$$

$$17 - 3 = \square$$

$$15 - 3 = \square$$

$$18 - 2 = \square$$

$$16 - 5 = \square$$

$$17 - 6 = \square$$

$$19 - 3 = \square$$

$$18 - 4 = \square$$

$$17 - 5 = \square$$

$$19 - 6 = \square$$

**1**

$18 - 5 = \square$

$10 - 6 = \square$

$10 - 8 = \square$

$16 - 3 = \square$

Verliebte
Zahlen



Zwerg und
Riese



$17 - 3 = \square$

$10 - 3 = \square$

$15 - 4 = \square$

$20 - 9 = \square$

**2**

$10 - 8 = \square$

$18 - 4 = \square$

$10 - 3 = \square$

$10 - 1 = \square$

$17 - 3 = \square$

$19 - 4 = \square$

$20 - 5 = \square$

$15 - 2 = \square$

$18 - 5 = \square$

$13 - 2 = \square$

$20 - 4 = \square$

$20 - 7 = \square$

**3**

> = <



$8 - 6 \square 9 - 2$

$7 - 2 \square 6 - 3$

$17 - 4 \square 19 - 6$

$7 - 3 \square 5 - 3$

$4 - 4 \square 5 - 5$

$15 - 1 \square 13 - 3$

$6 - 3 \square 8 - 2$

$14 - 2 \square 15 - 5$

$14 - 3 \square 15 - 2$

**1**

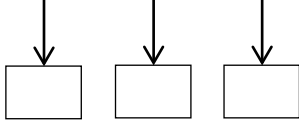
$6 - 2 = \square$

$5 - 2 = \square$

$4 - 2 = \square$

$\square - \square = \square$

$\square - \square = \square$



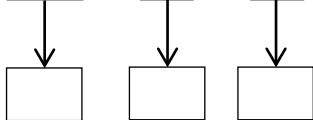
$10 - 1 = \square$

$10 - 3 = \square$

$10 - 5 = \square$

$\square - \square = \square$

$\square - \square = \square$



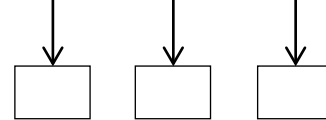
$18 - 1 = \square$

$17 - 2 = \square$

$16 - 3 = \square$

$\square - \square = \square$

$\square - \square = \square$



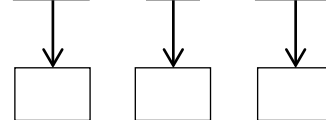
$20 - 6 = \square$

$18 - 5 = \square$

$16 - 4 = \square$

$\square - \square = \square$

$\square - \square = \square$

**2** Welcher Trick hilft dir?**10****5**

$10 - 5 = \square$

$7 - 2 = \square$

$12 - 2 = \square$

$17 - 2 = \square$

$19 - 4 = \square$

$10 - 4 = \square$

$20 - 10 = \square$

$16 - 3 = \square$

$15 - 5 = \square$


$17 - 6 = \square$

$10 - 7 = \square$

$13 - 3 = \square$



1 Welcher Trick hilft dir?



$13 - 2 =$

$10 - 6 =$

$18 - 5 =$

$12 - 2 =$

$10 - 3 =$

$13 - 10 =$

$15 - 3 =$

$10 - 9 =$

$14 - 4 =$

$16 - 2 =$

$11 - 1 =$

$20 - 5 =$

$17 - 6 =$

$20 - 2 =$

$17 - 10 =$

$19 - 7 =$

$16 - 10 =$

$10 - 1 =$

$20 - 7 =$

$18 - 10 =$



1 $9 - \boxed{5} = 4$

$19 - \boxed{} = 14$

$4 - \boxed{} = 2$

$14 - \boxed{} = 12$

$7 - \boxed{} = 3$

$17 - \boxed{} = 13$

$10 - \boxed{} = 7$

$20 - \boxed{} = 17$

$8 - \boxed{} = 1$

$18 - \boxed{} = 11$

$6 - \boxed{} = 2$

$16 - \boxed{} = 12$

$8 - \boxed{} = 5$

$18 - \boxed{} = 15$

$8 - \boxed{} = 6$

$18 - \boxed{} = 16$

$9 - \boxed{} = 2$

$19 - \boxed{} = 12$



2 $20 - \boxed{2} = 18$

$20 - \boxed{} = 12$

$20 - \boxed{} = 15$

$20 - \boxed{} = 14$

$20 - \boxed{} = 11$

$20 - \boxed{} = 17$

$20 - \boxed{} = 10$

$20 - \boxed{} = 20$

$20 - \boxed{} = 13$



3 $6 - \boxed{} = 2$

$10 - \boxed{} = 5$

$5 - \boxed{} = 3$

$7 - \boxed{} = 2$

$9 - \boxed{} = 2$

$18 - \boxed{} = 14$

$10 - \boxed{} = 1$

$13 - \boxed{} = 11$

$12 - \boxed{} = 2$

$14 - \boxed{} = 11$

$16 - \boxed{} = 10$

$11 - \boxed{} = 1$

$19 - \boxed{} = 16$

$20 - \boxed{} = 10$

$20 - \boxed{} = 8$